

AIPMT - 2014
(Physics, Chemistry and Biology)
Code P

Time: 3 hrs

Total Marks: 720

General Instructions:

1. The Answer sheet is inside this Text booklet. When you are directed to open the text booklet, take out the Answer Sheet and fill in the particulars on side – 1 and side – 2 carefully with blue/black ball point pen only.
 2. The test is of 3 hours duration and consists of 180 questions. Each question carries 4 marks. For each correct response the candidate will get 4 marks. For each incorrect response, one mark will be deducted. The maximum marks are 720.
 3. Use Blue / Black ball point pen only for writing particulars on this page / marking responses.
 4. Rough work is to be done on the space provided for this purpose in the text booklet only.
 5. On completion of the test, the candidate must handover the answer sheet to the invigilator in the room/ Hall. The candidates are allowed to take away this text booklet with them.
 6. Make sure that the CODE printed on side – 2 of the answer sheet is the same as that on this booklet, In case of discrepancy, the candidate should immediately report the matter to the invigilator for the replacement of both the test Booklet and the Answer Sheet.
 7. The candidates should ensure that the Answer sheet is not folded. Do not make any stray marks on the Answer sheet. Do not write your roll no. anywhere else except in the specified space in the Test booklet / Answer Sheet.
 8. Use of white fluid for correction is not permissible on the Answer Sheet.
-

Physics

1. If force (F), velocity (V) and time (T) are take As fundamental units, then the dimensions of mass are :
 - (1) $[F V T^{-1}]$
 - (2) $[F V T^{-2}]$
 - (3) $[F V^{-1} T^{-1}]$
 - (4) $[F V^{-1} T]$

2. A projectile is fired from the surface of the earth with a velocity of 5ms^{-1} and angle θ with the horizontal. Another projectile fired another planet with a velocity of 3ms^{-1} at the same angle follows a trajectory which is identical with the trajectory of the projectile fired from the earth. The value of the acceleration due to gravity on the planet is (in ms^{-2}) is: (given $g = 9.8\text{ms}^{-2}$)
- (1) 3.5
 - (2) 5.9
 - (3) 16.3
 - (4) 110.8

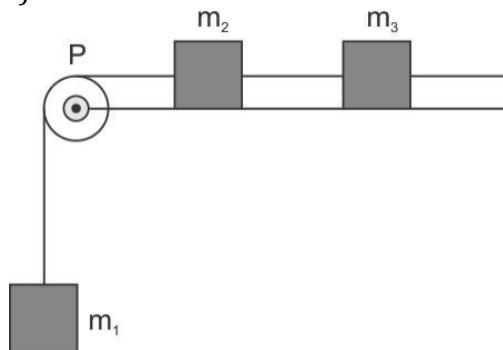
3. A particle is moving such that its position coordinates (x,y) are
 (2 m, 3 m) at time $t = 0$,
 (6 m, 7 m) at time $t = 2$ s and
 (13 m, 14 m) at time $t = 5$ s

Average velocity vector V_{av} from $t = 0$ to $t = 5$ s is: $\begin{pmatrix} \rightarrow \\ \end{pmatrix}$

- (1) $\frac{1}{5} (13\hat{i} + 14\hat{j})$
- (2) $\frac{7}{3} (\hat{i} + \hat{j})$
- (3) $2(\hat{i} + \hat{j})$
- (4) $\frac{11}{5} (\hat{i} + \hat{j})$

4. A system consists of three masses m_1 , m_2 and m_3 connected by a strings passing over a pulley P. The mass m_1 hangs freely and m_2 and m_3 are on a rough horizontal table (the coefficient of friction = μ) the pulley is frictionless and of negligible mass. The downward acceleration of mass m_1 is :

(Assue $m_1 = m_2 = m_3 = m$)



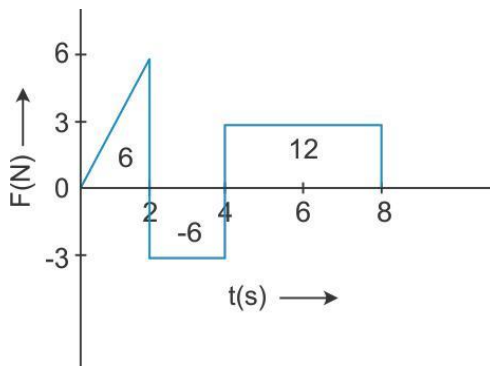
(1) $\frac{g(1 - \mu)}{9}$

(2) $\frac{2g\mu}{3}$

(3) $\frac{g(1 - 2\mu)}{3}$

(4) $\frac{g(1 - 2\mu)}{2}$

5. The force 'F' acting on a particle of mass 'm' is indicated by the force - time graph shown below. The change in momentum of the particle over the time interval from zero to 8 s is :



- (1) 24 Ns
(2) 20 Ns
(3) 12 Ns
(4) 6 Ns
6. A balloon with mass 'm' descending down with an acceleration 'a' (where $a < g$). how much mass should be removed from its so that it starts moving up with an acceleration 'a' ?

(1) $\frac{2ma}{g + a}$

(2) $\frac{2ma}{g - a}$

(3) $\frac{ma}{g + a}$

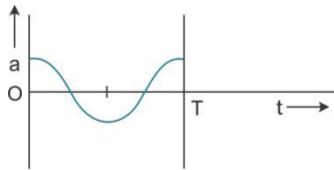
(4) $\frac{ma}{g - a}$

7. A body of mass ($4m$) is laying in x-y plane at rest. It suddenly explodes into three pieces. Two pieces each of mass (m) move perpendicular to each other with equal speeds (v). The total kinetic energy generated due to explosion is :

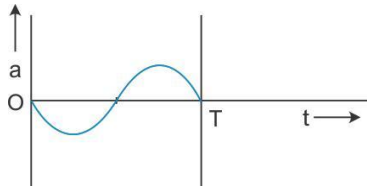
- (1) mv^2
- (2) $\frac{3}{2}mv^2$
- (3) $2mv^2$
- (4) $4mv^2$

8. The oscillation of a body on a smooth horizontal surface is represented by the equation, Where, $X = A \cos(\omega t)$; X = displacement at time t ; ω = frequency of oscillation
Which one of the following graphs shows correctly the variation 'a' with 't'?

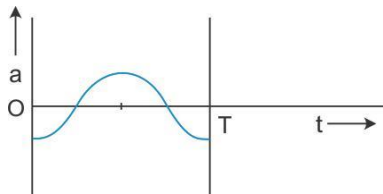
(1)



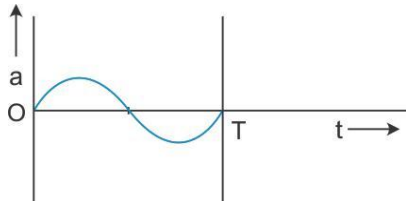
(2)



(3)



(4)



Here a = acceleration at time t
 T = time period

9. A solid cylinder of mass 50 g and radius 0.5 m is free to rotate about the horizontal axis. A massless string is wound round the cylinder with one end attached to it and other hanging freely. Tension in the string required to produce an angular acceleration of 2 revolutions s^{-2} is :

- (1) 25 N
- (2) 50 N
- (3) 78.5 N
- (4) 157 N

10. The ratio of the accelerations for a solid sphere (mass 'm' and radius 'R' rolling down an incline of angle ' θ ' Without slipping and slipping down the incline with rolling is :

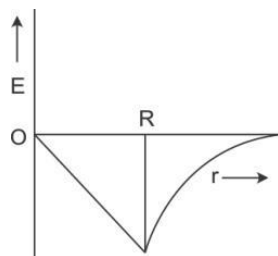
- (1) 5 : 7
- (2) 2 : 3
- (3) 2 : 5
- (4) 7 : 5

11. A black hole is an object whose gravitational field is so strong that even light cannot escape from it. To what approximate radius would earth (mass = 5.98×10^{24} kg) have to be compressed to be a black hole ?

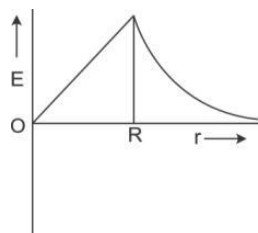
- (1) 10^{-9} m
- (2) 10^{-6} m
- (3) 10^{-2} m
- (4) 100 m

12. Dependence of intensity of gravitational field (E) of earth with distance (r) from centre of earth is correctly represented by :

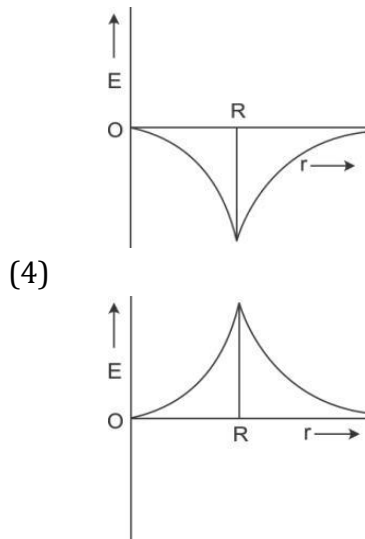
(1)



(2)



(3)



13. Copper of fixed volume 'V' is drawn into wire of length 'l'. When the wire is subjected to a constant force 'F' the extension produced in the wire is ' Δl '. Which of the following graphs is a straight line?

- (1) Δl versus $1/l$
- (2) Δl versus l^2
- (3) Δl versus $1/l^2$
- (4) Δl versus l

14. A certain number of spherical drops of liquid of radius 'r' coalesce to form a single drop of radius 'R' and volume 'V'. if 'T' is the surface tension of the liquid, then :

- (1) Energy = $4VT \left(\frac{1}{r} - \frac{1}{R} \right)$ is released.
- (2) Energy = $3VT \left(\frac{1}{r} + \frac{1}{R} \right)$ is absorbed
- (3) Energy = $3VT \left(\frac{1}{r} - \frac{1}{R} \right)$ is released

(4) Energy is neither released nor absorbed

15. Steam at 100°C is passed into 20 g of water at 10°C . when water acquires a temperature of 80°C the mass of water present will be :

[Take specific heat of water = $1 \text{ cal g}^{-1} \text{ }^\circ\text{C}^{-1}$ and latent heat of steam = 540 cal g^{-1}]

- (1) 24 g
- (2) 31.5 g
- (3) 42.5 g
- (4) 22.5 g

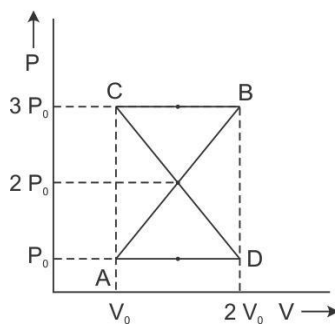
16. Certain quantity of water cools from 70°C to 60°C in the first 5 minutes and to 54°C in the next 5 minutes. The temperature of the surroundings is :

- (1) 45°C
- (2) 20°C
- (3) 42°C
- (4) 10°C

17. A monoatomic gas at pressure P , having a volume V expands isothermally to a volume $2V$ and then adiabatically to a volume $16V$. the final pressure if the gas is : (take $\gamma = 5/3$)

- (1) $64P$
- (2) $32P_0$
- (3) $P/64$
- (4) $16P$

18. A thermodynamic system undergoes cyclic process ABCDA as shown in Fig. the work done by the system in the cycle is :



- (1) P_0V_0
- (2) $2P_0V_0$
- (3) $\frac{P_0}{2}V_0$
- (4) Zero

19. The mean free path of molecules of a gas, (radius is inversely proportional to :

- (1) r^3
- (2) r^2
- (3) r
- (4) \sqrt{r}

20. If n_1, n_2 and n_3 are the fundamental frequencies three segments into which a string is divided, the original fundamental frequency n of the string is given by :

(1) $\frac{1}{n} = \frac{1}{n_1} + \frac{1}{n_2} + \frac{1}{n_3}$

(2) $\frac{1}{\sqrt{n}} = \frac{1}{\sqrt{n_1}} + \frac{1}{\sqrt{n_2}} + \frac{1}{\sqrt{n_3}}$

(3) $\sqrt{n} = \sqrt{n_1} + \sqrt{n_2} + \sqrt{n_3}$

(4) $n = n_1 + n_2 + n_3$

21. The number of possible natural oscillations of column in a pipe closed at one end of length 85 cm whose frequencies lie below 1250 Hz are :

(velocity of sound = 340 ms^{-1})

(1) 4

(2) 5

(3) 7

(4) 6

22. A speeding motorcyclist sees traffic jam ahead him. He slows down to 36 km/hour. He finds the traffic has eased and a car moving ahead of him 18 km/hour is honking at a frequency of 1392 Hz. The speed of sound is 343 m/s, the frequency of the honk as heard by him will be :

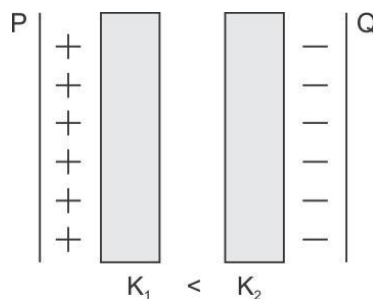
(1) 1332 Hz

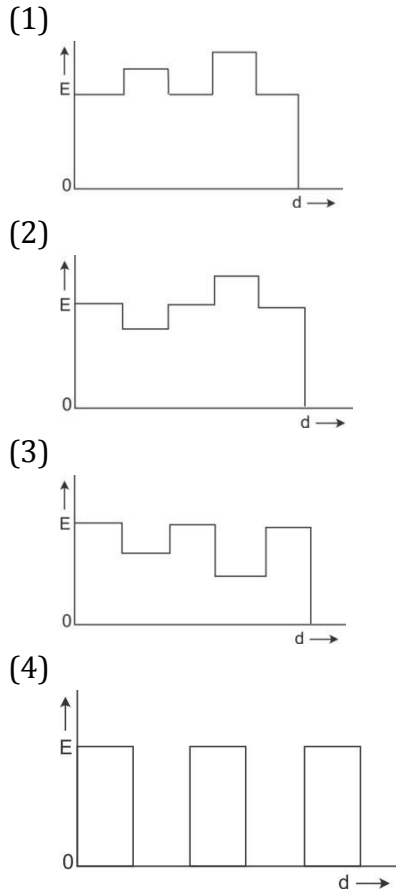
(2) 1372 Hz

(3) 1412 Hz

(4) 1454 Hz

23. Two thick dielectric slabs of dielectric constants K_1 and K_2 ($K_1 < K_2$) are inserted between plates of a parallel plate capacitor as shown in the figure. The variation of electric field 'E' between the plates with distance 'd' as measured from plate P is correctly shown by :





24. A conducting sphere of radius R is given a charge Q . The electric potential and the electric field at the centre of the sphere respectively are

- (1) Zero and $\frac{Q}{4\pi\epsilon_0 R^2}$
- (2) $\frac{Q}{4\pi\epsilon_0 R}$ and Zero
- (3) $\frac{Q}{4\pi\epsilon_0 R}$ and $\frac{Q}{4\pi\epsilon_0 R^2}$
- (4) Both are zero

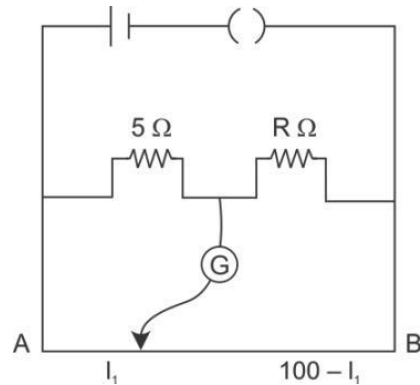
25. In a region the potential is represented by $V(x,y,z) = 6x - 8xy - 8y + 6yz$, where v is in volts and x, y, z are in meters. The electric force experienced by a charge of 2 coulomb situated at point $(1,1,1)$ is :

- (1) $6\sqrt{5}$ N
- (2) 30 N
- (3) 24 N
- (4) $4\sqrt{35}$ N

26. Two cities are 150 km apart. Electric power is sent from one city to another city through copper wires. The fall of potential per km is 8 volt and the average resistance per km is 0.5Ω . The power loss in the wire is :

- (1) 19.2 w
- (2) 19.2 kW
- (3) 19.2 J
- (4) 12.2 kW

27. The resistances in the two arms of the meter bridge are 5Ω and $R \Omega$ respectively, When the resistance. R is shunted with an equal resistance; the new balance point is at $1.6l_1$. the resistance 'R' is:



- (1) 10Ω
- (2) 15Ω
- (3) 20Ω
- (4) 25Ω

28. A potentiometer circuit has been set up for finding the internal resistance of given cell. The main battery, used across the potentiometer wire, has an emf of 2.0 V and a negligible internal resistance. The potentiometer wire itself is 4 m long. When the resistance R connected across the given cell, has values of.

- (1) Infinity
- (2) 9.5Ω

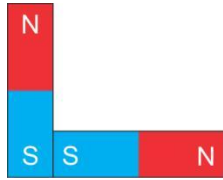
The 'balancing lengths' on the potentiometer wire are found to be 3m and 2.85 m, respectively.

The value of internal resistance of the cell is:


- (1) 0.25Ω
- (2) 0.95Ω
- (3) 0.5Ω
- (4) 0.75Ω

29. Following figures show the arrangement of bar magnets in different configurations. Each magnet has magnetic dipole moment \vec{m} . Which configuration has highest net magnetic dipole moment?

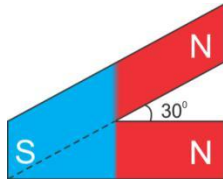
(a)



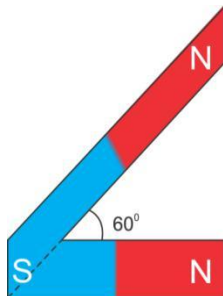
(b)



(c)



(d)



(1) (a)

(2) (b)

(3) (c)

(4) (d)

30. In an ammeter 0.2% of main current passes through the galvanometer. If resistance of galvanometer is G , the resistance of ammeter will be :

(1) $499^1 G$

(2) $500 \frac{499}{G}$

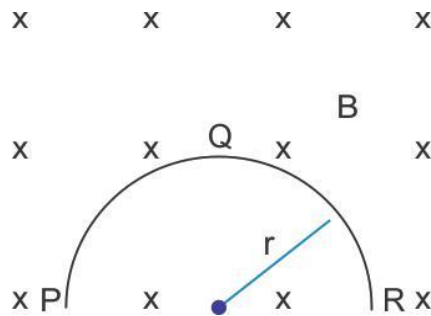
(3) $500^1 G$

(4) $\frac{500}{499} G$

31. Two identical long conducting wires AOB and COD are placed at right angle to each other, with one above other such that 'O' is their common point for the two. The wires carry I_1 and I_2 currents, respectively. Point 'P' is lying at distance 'd' from 'O' along a direction perpendicular to the plane containing the wires. The magnetic field at the point 'P' will be :

- (1) $\frac{\mu_0}{2\pi d} \left(\frac{I_1}{2} + \frac{I_2}{2} \right)$
- (2) $2 \frac{\mu_0}{\pi d} (I_1 + I_2)$
- (3) $2 \frac{\mu_0}{\pi d} (I_1^2 - I_2^2)$
- (4) $2 \frac{\mu_0}{\pi d} (I_1^2 + I_2^2)^{1/2}$

32. A thin semicircular conducting ring (PQR) of radius 'r' is falling with its plane vertical in a horizontal magnetic field B, as shown in figure. The potential difference developed across the ring when its speed is v, is:



- (1) Zero
- (2) $Bv\pi r^2/2$ and P is at higher potential
- (3) $\pi r B v$ and R is at higher potential
- (4) $2r B v$ and R is at higher potential

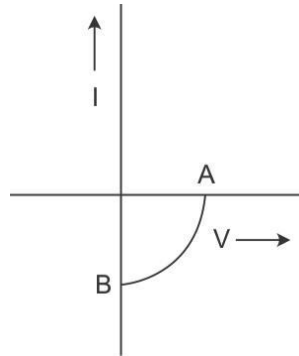
33. A transformer having efficiency of 90% is working on 200 V and 3 kW power supply. If the current in the secondary coil is 6A, the voltage across the secondary coil and the current in the primary coil respectively are :

- (1) 300 V, 15 A
- (2) 450 V, 15 A
- (3) 450 V, 13.5 A
- (4) 600 V, 15 A

34. Light with an energy flux of $25 \times 10^4 \text{ Wm}^{-2}$ falls on a perfectly reflecting surface at normal incidence. If the surface area is 15 cm^2 , the average force exerted on the surface is :
- (1) $1.25 \times 10^{-6} \text{ N}$
 - (2) $2.50 \times 10^{-6} \text{ N}$
 - (3) $1.20 \times 10^{-6} \text{ N}$
 - (4) $3.0 \times 10^{-6} \text{ N}$
35. A beam of light of $\lambda = 600 \text{ nm}$ from a distant source falls on a single slit 1 mm wide and the resulting diffraction pattern is observed on a screen 2 m away. The distance between first dark fringes on either side of the central bright fringe is :
- (1) 1.2 cm
 - (2) 1.2 mm
 - (3) 2.4 cm
 - (4) 2.4 mm
36. In the Young's double – slit experiment, the intensity of light at a point on the screen where the path difference is λ is K , (λ being the wave length of light used). The intensity at point where the path difference is $\lambda / 4$ will be:
- (1) K
 - (2) $K/4$
 - (3) $K/2$
 - (4) Zero
37. If the focal length of objective lens is increased then magnifying power of :
- (1) Microscope will increase but that of telescope decrease.
 - (2) Microscope and telescope both will increase
 - (3) Microscope and telescope both will decrease
 - (4) Microscope will decrease but that of telescope will increase.
38. The angle of prism is 'A' One of its refracting surfaces is silvered. Light rays falling at an angle of incidence $2A$ on the first surface returns back through the same path after suffering reflection at the silvered surface. The refractive index μ of the prism is
- (1) $2 \sin A$
 - (2) $2 \cos A$
 - (3) $\frac{1}{2} \cos A$
 - (4) $\tan A$

39. When the energy of the incident radiation is increased by 20% the kinetic energy of the photoelectrons emitted from a metal surface increased from 0.5 eV to 0.8 eV. The work function of the metal is
- (1) 0.65 eV
 - (2) 1.0 eV
 - (3) 1.3 eV
 - (4) 1.5 eV
40. If the kinetic energy of the particle is increased to 16 times its previous value, the percentage change in the de-broglie wavelength of the particle is :
- (1) 25
 - (2) 75
 - (3) 60
 - (4) 50
41. Hydrogen atom in ground state is excited by a monochromatic radiation of $\lambda = 975 \text{ \AA}$.
Number of spectral lines in the resulting spectrum emitted will be :
- (1) 3
 - (2) 2
 - (3) 6
 - (4) 10
42. The Binding energy per nucleon of ${}^7_3\text{Li}$ and ${}^4_2\text{He}$ nuclei are 5.60 MeV and 7.06 MeV respectively. In the nuclear reaction ${}^7_3\text{Li} + {}^1_1\text{H} \rightarrow {}^4_2\text{He} + {}^4_2\text{He} + Q$, the value of energy Q released is :
- (1) 19.6 MeV
 - (2) -2.4 MeV
 - (3) 8.4 MeV
 - (4) 17.3 MeV
43. A radio isotope 'X' with a half life 1.4×10^9 years decays to 'Y' which is stable. A sample of the rock from a cave was found to contain 'X' and 'Y' in the ratio 1:7. The age of the rock is :
- (1) 1.96×10^9 years
 - (2) 3.92×10^9 years
 - (3) 4.20×10^9 years
 - (4) 8.40×10^9 years

44. The given graph represents $V - I$ characteristics for semiconductor device.



Which of the following statement is correct?

- (1) It is $V - I$ characteristics for solar cell where point A represents open circuit voltage and point b short circuit current.
- (2) It is for s solar cell and points A and B represent open circuit voltage and current, respectively.
- (3) It is for a photodiode and points A and B represent open circuit voltage and current, respectively
- (4) It is for LED and points A and B represent open circuit voltage and short circuit current, respectively

45. The barrier potential of a p - n junction depends on :

- (a) Type of semi conductor material
- (b) Amount of doping
- (c) Temperature

Which one of the following is correct?

- (1) (a) and (b) only
- (2) (b) only
- (3) (b) and (c) only
- (4) (a),(b) and (c)

Chemistry

46. What is the maximum number of orbitals that can be identified with the following quantum numbers?
 $n = 3, l = 1, m_l = 0$
- (1) 1
 - (2) 2
 - (3) 3
 - (4) 4
47. Calculate the energy in joule corresponding to light of wavelength 45 nm :
(Planck's constant $h = 6.63 \times 10^{-34}$ Js ; speed of light $c = 3 \times 10^8$ ms⁻¹)
- (1) 6.67×10^{15}
 - (2) 6.67×10^{11}
 - (3) 4.42×10^{-15}
 - (4) 4.42×10^{-18}
48. Equal masses of H₂, O₂ and methane have been taken in a container of volume V at temperature 27°C in identical conditions. The ratio of the volumes of gases H₂ : O₂ : methane would be :
- (1) 8 : 16 : 1
 - (2) 16 : 8 : 1
 - (3) 16 : 1 : 2
 - (4) 8 : 1 : 2
49. If a is the length of the side of a cube, the distance between the body centered atom and one corner atom in the cube will be
- (1) $\frac{2}{\sqrt{3}} a$
 - (2) $\frac{4}{\sqrt{3}} a$
 - (3) $\frac{\sqrt{3}}{\sqrt{4}} a$
 - (4) $\frac{\sqrt{3}}{\sqrt{2}} a$
50. Which property of colloids is not dependent on the charge on colloidal particles ?
- (1) Coagulation
 - (2) Electrophoresis
 - (3) Electro - osmosis
 - (4) Tyndall effect

51. Which of the following salts will give highest pH in water ?
- (1) KCl
 - (2) NaCl
 - (3) Na₂CO₃
 - (4) CuSO₄
52. Of the following 0.10 aqueous solutions, which one will exhibit the largest freezing point depression?
- (1) KCl
 - (2) C₆H₁₂O₆
 - (3) Al₂(SO₄)₃
 - (4) K₂SO₄
53. When 22.4 litres of H₂(g) is mixed with 11.2 litres of Cl₂(g), each at S.T.P, the moles of HCl(g) formed is equal to :
- (1) 1 mol of HCl(g)
 - (2) 2 mol of HCl(g)
 - (3) 0.5 mol of HCl(g)
 - (4) 1.5 mol of HCl(g)
54. When 0.1 mol MnO₄²⁻ is oxidised the quantity of electricity required to completely oxidize MnO₄²⁻ to MnO₄⁻ is :
- (1) 96500 C
 - (2) 2 x 96500 C
 - (3) 9650 C
 - (4) 96.50 C
55. Using the Gibbs energy change, ΔG⁰ = +63.3 kJ, for the following reaction,
- $$\text{Ag}_2\text{CO}_3(\text{s}) \rightleftharpoons 2\text{Ag}^+(\text{aq}) + \text{CO}_3^{2-}(\text{aq})$$
- The K_{sp} of Ag₂CO₃(s) in water at 25°C is: (R = 8.314 J K⁻¹ mol⁻¹)
- (1) 3.2 x 10⁻²⁶
 - (2) 8.0 x 10⁻¹²
 - (3) 2.9 x 10⁻³
 - (4) 7.9 x 10⁻²

56. The weight of silver (at.wt = 108) displaced by a quantity of electricity which displaces 5600 mL of O₂ at STP will be :
- (1) 5.4 g
 - (2) 10.8 g
 - (3) 54.0 g
 - (4) 108.0 g
57. Which of the following statements is correct for the spontaneous adsorption of a gas?
- (1) S is negative and, therefore, H should be highly positive.
 - (2) S is negative and therefore, H should be highly negative.
 - (3) S is positive and therefore, H should be negative.
 - (4) S is positive and, therefore, H should also be highly positive.
58. For the reversible reaction :
- $$\text{N}_2(\text{g}) + 3\text{H}_2(\text{g}) \rightleftharpoons 2\text{NH}_3(\text{g}) + \text{heat}$$
- The equilibrium shifts in forward direction :
- (1) By increasing the concentration of NH_{3(g)}
 - (2) By decreasing the pressure
 - (3) By decreasing the concentration of N_{2(g)} and H_{2(g)}
 - (4) By increasing pressure and decreasing temperature
59. For the reaction :
- $$\text{X}_2\text{O}_4(\text{l}) \rightarrow 2\text{XO}_2(\text{g})$$
- U = 2.1 k cal, S = 20 cal K⁻¹ at 300 K
- Hence, G is
- (1) 2.7 k cal
 - (2) -2.7 k cal
 - (3) 9.3 k cal
 - (4) -9.3 k cal
60. For a given exothermic reaction, K_p and K'_p are the equilibrium constants at temperatures T₁ and T₂, respectively. Assuming that heat of reaction is constant in temperature range between T₁ and T₂, it is readily observed that :
- (1) K_p > K'_p
 - (2) K_p < K'_p
 - (3) K_p = K'_p
 - (4) $K_p \equiv \overline{K'_p}$

61. Which of the following orders of ionic radii is correctly represented ?
- (1) $H^- > H^+ > H$
 - (2) $Na^+ > F^- > O^{2-}$
 - (3) $F^- > O^{2-} > Na^+$
 - (4) $Al^{3+} > Mg^{2+} > N^{3-}$
62. 1.0 g of magnesium is burnt with 0.56 g O_2 in a closed vessel. Which reactant is left in excess and how much?
(At.wt.Mg = 24; O = 16)
- (1) Mg, 0.16 g
 - (2) O_2 , 0.16 g
 - (3) Mg, 0.44 g
 - (4) O_2 , 0.28 g
63. The pair of compounds that can exist together is :
- (1) $FeCl_3$, $SnCl_2$
 - (2) $HgCl_2$, $SnCl_2$
 - (3) $FeCl_2$, $SnCl_2$
 - (4) $FeCl_3$, KI
64. Be^{2+} is isoelectronic with which of the following ions?
- (1) H^+
 - (2) Li^+
 - (3) Na^+
 - (4) Mg^{2+}
65. Which of the following molecules has the maximum dipole moment ?
- (1) CO_2
 - (2) CH_4
 - (3) NH_3
 - (4) NF_3
66. Which one of the following species has plane triangular shape?
- (1) N_3
 - (2) NO_3^-
 - (3) NO_2^-
 - (4) CO_2

67. Acidity of diprotic acids in aqueous solutions increase in the order
- (1) $\text{H}_2\text{S} < \text{H}_2\text{Se} < \text{H}_2\text{Te}$
 - (2) $\text{H}_2\text{Se} < \text{H}_2\text{S} > \text{H}_2\text{Te}$
 - (3) $\text{H}_2\text{Te} < \text{H}_2\text{S} < \text{H}_2\text{Se}$
 - (4) $\text{H}_2\text{Se} < \text{H}_2\text{Te} < \text{H}_2\text{S}$
68. (a) $\text{H}_2\text{O}_2 + \text{O}_3 \rightarrow \text{H}_2\text{O} + 2\text{O}_2$
(b) $\text{H}_2\text{O}_2 + \text{Ag}_2\text{O} \rightarrow 2\text{Ag} + \text{H}_2\text{O} + \text{O}_2$
Role of hydrogen peroxide in the above reactions is respectively:
- (1) Oxidizing in (a) and reducing in (b)
 - (2) Reducing in (a) and oxidizing in (b)
 - (3) Reducing in (a) and (b)
 - (4) Oxidizing in (a) and (b)
69. Artificial sweetner which is stable under cold conditions only is :
- (1) Saccharine
 - (2) Sucralose
 - (3) Aspartame
 - (4) Alitame
70. In acidic medium, H_2O_2 changes $\text{Cr}_2\text{O}_7^{2-}$ to CrO_5 which has two (-O-O-) bonds. Oxidation state of Cr in CrO_5 is :
- (1) +5
 - (2) +3
 - (3) +6
 - (4) -10
71. The reaction of aqueous KMnO_4 with H_2O_2 in acidic conditions gives :
- (1) Mn^{4+} and O_2
 - (2) Mn^{2+} and O_2
 - (3) Mn^{2+} and O_3
 - (4) Mn^{4+} and MnO_2
72. Among the following complexes the one which shows zero crystal field stabilization energy (CFSE) is :
- (1) $[\text{Mn}(\text{H}_2\text{O})_6]^{3+}$
 - (2) $[\text{Fe}(\text{H}_2\text{O})_6]^{3+}$
 - (3) $[\text{Co}(\text{H}_2\text{O})_6]^{2+}$
 - (4) $[\text{Co}(\text{H}_2\text{O})_6]^{3+}$

73. Magnetic moment 2.83 BM is given by which of the following ions? (At.nos. Ti = 22, Cr = 24, Mn = 25, Ni = 28)

- (1) Ti^{3+}
- (2) Ni^{2+}
- (3) Cr^{3+}
- (4) Mn^{2+}

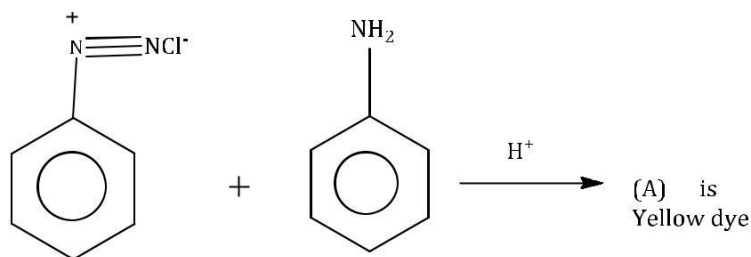
74. Which of the following complexes is used to be as anticancer agent ?

- (1) mer - $[\text{Co}(\text{NH}_3)_3\text{Cl}]$
- (2) cis - $[\text{PtCl}_2(\text{NH}_3)_2]$
- (3) cis - $\text{K}_2[\text{PtCl}_2\text{Br}_2]$
- (4) Na_2CoCl_4

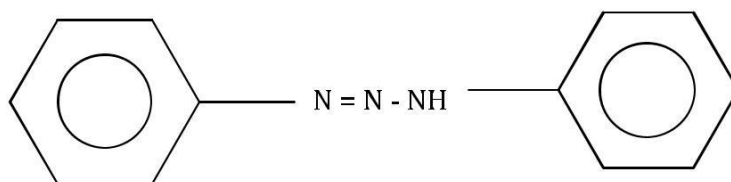
75. Reasons of lanthanoid contraction is :

- (1) Negligible screening effect of 'f' orbitals
- (2) Increasing Nuclear charge
- (3) Decreasing nuclear charge
- (4) Decreasing screening effect

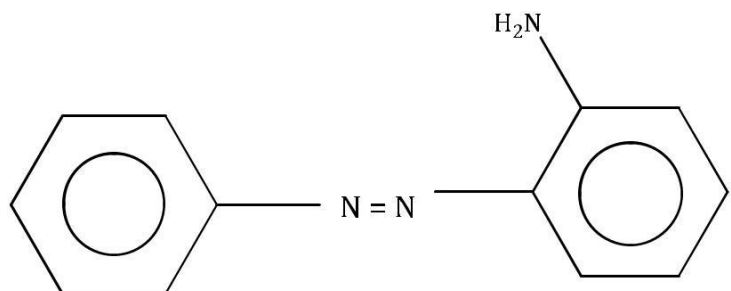
76. In the following reaction, the product (A)



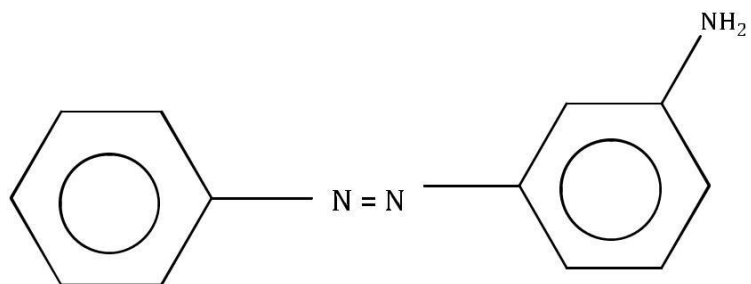
(1)



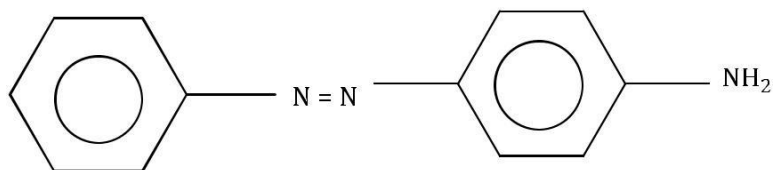
(2)



(3)



(4)

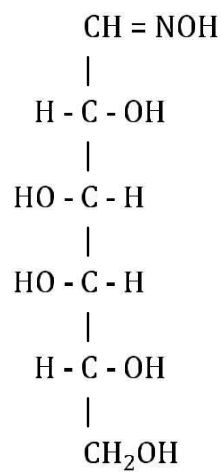


77. Which of the following will be most stable diazonium salt $\text{RN}_2^+ \text{X}^-$?

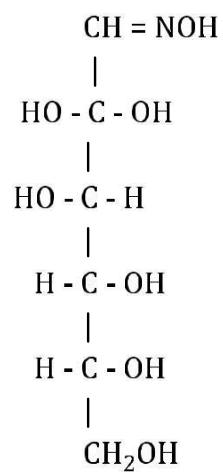
- (1) $\text{CH}_3\text{N}_2^+ \text{X}^-$
- (2) $\text{C}_6\text{H}_5\text{N}_2^+ \text{X}^-$
- (3) $\text{CH}_3\text{CH}_2\text{N}_2^+ \text{X}^-$
- (4) $\text{C}_6\text{H}_5\text{CH}_2\text{N}_2^+ \text{X}^-$

78. D (+) glucose reacts with hydroxyl amine and yields an oxime. The structure of the oxime would be :

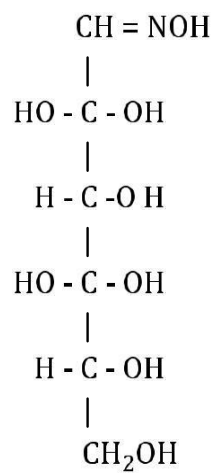
(1)



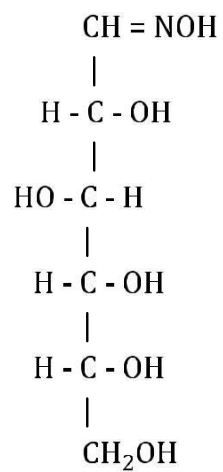
(2)



(3)



(4)

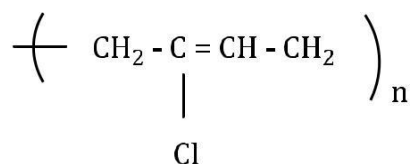


79. Which of the following hormones is produced under the condition of stress which stimulates glycogenolysis in the liver of human beings ?

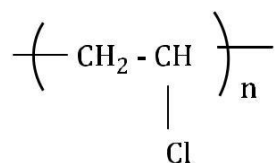
- (1) Thyroxin
- (2) Insulin
- (3) Adrenaline
- (4) Estradiol

80. Which one of the following is an example of a thermosetting polymer?

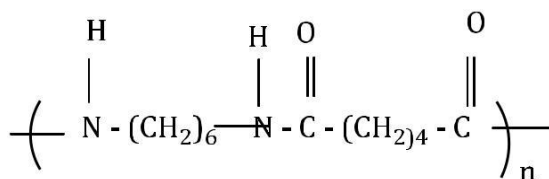
(1)



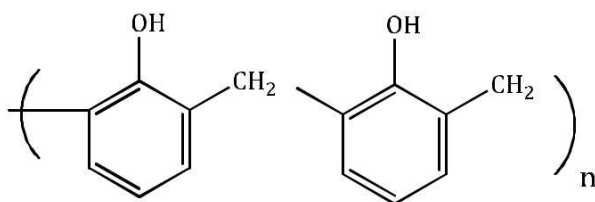
(2)



(3)



(4)



81. Which of the following organic compounds polymerizes to form the polyester Dacron?

- (1) Propylene and para HO - (C₆H₄) - OH
- (2) Benzoic acid and ethanol
- (3) Terephthalic acid and ethyleneglycol
- (4) Benzoic acid and para HO - (C₆H₄) - OH

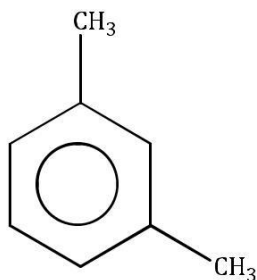
82. Which one of the following is not a common component of photochemical smog ?

- (1) Ozone
- (2) Acrolein
- (3) Peroxyacetyl nitrate
- (4) Chlorofluorocarbons

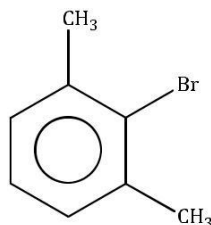
83. In the Kjeldahl's method for estimation of nitrogen present in a soil sample, ammonia evolved from 0.75 g sample neutralized 10 mL of 1M H_2SO_4 . The percentage of nitrogen in the soil is :

- (1) 37.33
- (2) 45.33
- (3) 35.33
- (4) 43.33

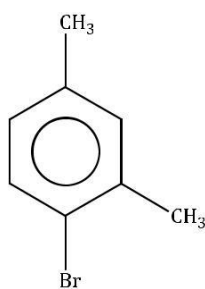
84. What products are formed when the following compound is treated with Br in the presence of FeBr_3 ?



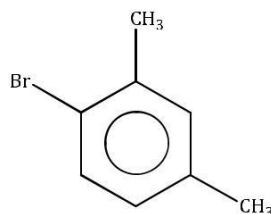
(1)



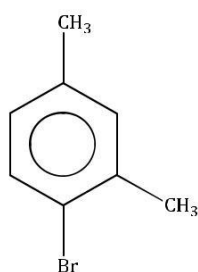
and



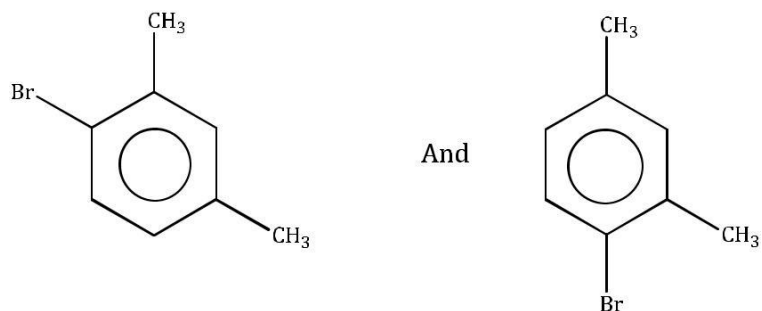
(2)



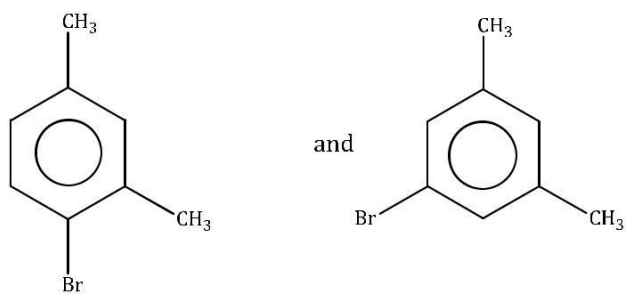
And



(3)

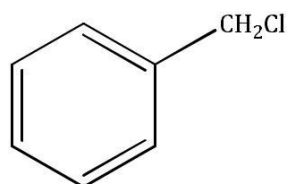


(4)



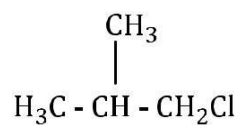
85. Which of the following compounds will undergo racemisation when solution of KOH hydrolyses?

(i)

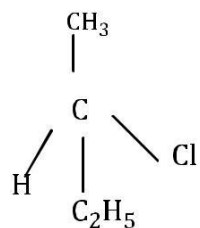


(ii) $\text{CH}_3\text{CH}_2\text{CH}_2\text{Cl}$

(iii)



(iv)



(1) and (ii)

(2) (ii) and (iv)

(3) (iii) and (iv)

(4) (i) and (iv)

86. Among the following sets of reactants which one produces anisole?

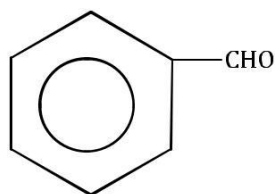
- (1) $\text{CH}_3\text{CHO}; \text{RMgX}$
- (2) $\text{C}_6\text{H}_5\text{OH}; \text{NaOH}; \text{CH}_3\text{I}$
- (3) $\text{C}_6\text{H}_5\text{OH}; \text{neutral FeCl}_3$
- (4) $\text{C}_6\text{H}_5 - \text{CH}_3; \text{CH}_3\text{COCl}; \text{AlCl}_3$

87. Which of the following will not be soluble in sodium hydrogen carbonate?

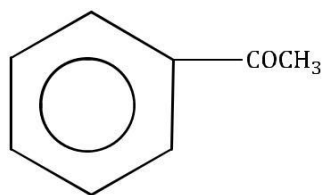
- (1) 2,4,6 - trinitrophenol
- (2) Benzoic acid
- (3) o - Nitrophenol
- (4) Benzenesulphonic acid

88. Which one is most reactive towards Nucleophilic addition reaction?

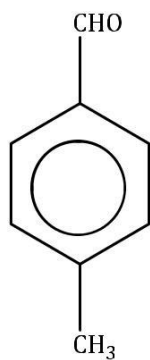
(1)



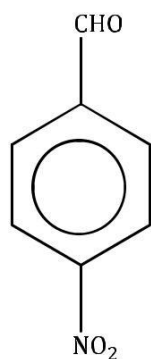
(2)



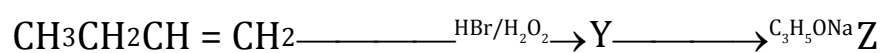
(3)



(4)



89. Identity Z in the sequence of reactions :



- (1) $\text{CH}_3 - (\text{CH}_2)_3 - \text{O} - \text{CH}_2\text{CH}_3$
- (2) $(\text{CH}_3)_2\text{CH}_2 - \text{O} - \text{CH}_2\text{CH}_3$
- (3) $\text{CH}_3(\text{CH}_2)_4 - \text{O} - \text{CH}_3$
- (4) $\text{CH}_3\text{CH}_2 - \text{CH}(\text{CH}_3) - \text{O} - \text{CH}_2\text{CH}_3$

90. Which of the following organic compounds has same hybridization as its combustion product - (CO₂)?

- (1) Ethane
- (2) Ethyne
- (3) Ethene
- (4) Ethanol

Biology

- 91.** Which one of the following shows isogamy with non – flagellated gamets ?
- (1) Sargassum
 - (2) Eatocarpus
 - (3) Ulothrix
 - (4) Spirogyra
- 92.** Five kingdom system of classification suggested by R.H. Whittaker is not based on :
- (1) Presence or absence of a well defined nucleus
 - (2) Mode of reproduction
 - (3) Mode of nutrition
 - (4) Complexity of body organization
- 93.** Which one of the following fungi contains hallucinogens ?
- (1) Morchella esculenta
 - (2) Amanita muscaria
 - (3) Neurospora sp.
 - (4) Ustilago sp.
- 94.** Archaeobacteria differ from eubacteria in :
- (1) Cell membrane structure
 - (2) Mode of nutrition
 - (3) Cell shape
 - (4) Mode of reproduction
- 95.** Which one of the following is wrong about chara?
- (1) Upper oogonium and lower round antheridium
 - (2) Globule and nucule present on the same plant
 - (3) Upper antheridium and lower oogonium
 - (4) Globule is male reproductive structure
- 96.** Which of the following is responsible for peat formation ?
- (1) Marchantia
 - (2) Riccia
 - (3) Funaria
 - (4) Sphagnum

97. Placenta and pericarp are both edible portions in:

- (1) Apple
- (2) Banana
- (3) Tomato
- (4) Potato

98. When the margins of sepals or petals overlap one another without any particular direction, the condition is termed as :

- (1) Vexillary
- (2) Imbricate
- (3) Twisted
- (4) Valvate

99. You are given a fairly old piece of dicot stem and a dicot root. Which of the following anatomical structures will you use to distinguish between the two?

- (1) Secondary xylem
- (2) Secondary phloem
- (3) Protoxylem
- (4) Cortical cells

100. Which one of the following statement is correct ?

- (1) The seed in grasses is not endospermic
- (2) Mango is parthenocarpic fruit
- (3) A proteinaceous aleurone layer is present in maize grain
- (4) A sterile pistil is called a staminode

101. Tracheids differ from other tracheary elements in :

- (1) Having casparian strips
- (2) Being imperforate
- (3) Lacking nucleus
- (4) Being lignified

102. An example of edible underground stem is :

- (1) Carrot
- (2) Groundnut
- (3) Sweet potato
- (4) Potato

103. Which structure perform the function of mitochondria in bacteria?

- (1) Nucleoid
- (2) Ribosomes
- (3) Cell wall
- (4) Mesosomes

104. The solid linear cyroskeltal elements having a diameter of 6 nm and made up of a single type of monomer are known as :

- (1) Microtubules
- (2) Micorfilaments
- (3) Intermediate filaments
- (4) Lamins

105. The osmotic expansion of a cell kept in water is chiefly regulated by:

- (1) Mitrochondria
- (2) Vacuoles
- (3) Plastics
- (4) Ribosomes

106. During which phase (s) of cell cycle, amount of DNA in a cell remains at 4C level if the intial amount is denoted as 2C?

- (1) G₀ and G₁
- (2) G₁ and S
- (3) Only G₂
- (4) G₂ and M

107. Match the following and select the correct answer :

- | | |
|-----------------|-----------------------------------|
| (a) Centriole | (i) Infoldings in mitochondria |
| (b) Chlorophyll | (ii) Thaylakoids |
| (c) Cristae | (iii) Nucleic acids |
| (d) Ribozymes | (iv) basal body cilia or flagella |
-
- | | | | | |
|-----|------|-------|------|-------|
| (1) | (a) | (b) | (c) | (d) |
| (2) | (i) | (ii) | (iv) | (iii) |
| (3) | (i) | (iii) | (ii) | (iv) |
| (4) | (iv) | (iii) | (i) | (ii) |

108. Dr.F went noted that if coleptile were removed and placed on agar for one hour, the agar would produce a bending when placed on one side of freshly- cut – coleptile stumps. Of what significance is this experiment ?

- (1) It made possible the isolation and exact identification of auxin
- (2) It is the basis for quantitive determination of small amounts of growth – promoting substances
- (3) It supports the hypothesis that IAA is auxin
- (4) It demonstartaed polar movement of auxins

109. Deficiency symptoms of nitrogen and potassium are visible first in :

- (1) Senescent leaves
- (2) Young leaves
- (3) Roots
- (4) Buds

110. In which one of the following processes CO₂ is not released ?

- (1) Aerobic respiration in plants
- (2) Aerobic respiration in animals
- (3) Alcoholic fermentation
- (4) Lactate fermentation

111. Anoxygenic photosynthesis is characteristic of :

- (1) Rhodospirillum
- (2) Spirogyra
- (3) Chlamydomonas
- (4) Ulva

112. A few normal seedlings of tomato were kept in a dark room. After a few days they were found to have become white – coloured like albinos. Which of the following terms will you use to describe them?

- (1) Mutated
- (2) Embolised
- (3) Etiolated
- (4) Defoliated

113. Which one of the following growth regulators is known as 'stress hormone'?

- (1) Abscisic acid
- (2) Ethylene
- (3) GA₃
- (4) Indole acetic acid

114. Geitonogamy involves

- (1) Fertilization of a flower by the pollen from another flower of the same plant.
- (2) Fertilization of a flower by the pollen from the same flower
- (3) Fertilization of a flower by the pollen from a flower of another plant in the same population
- (4) Fertilization of a flower by the pollen from a flower of another plant belonging to a distant population

115. Male gametophyte with least number of cells is present in:

- (1) Pteris
- (2) Funaria
- (3) Liliium
- (4) Pinus

116. An aggregate fruit is one which develops from:

- (1) Multicarpellary syncarpous gynoecium
- (2) Multicarpellary apocarpus gynocium
- (3) Complete inflorescence
- (4) Multicarpellary superior ovary

117. Pollen tablets are available in the market for:

- (1) In vitro fertilization
- (2) Breeding programmes
- (3) Supplementing food
- (4) Ex situ conservation

118. Function of filiform apparatus is to

- (1) Recognize the suitable pollen at stigma
- (2) Stimulate division of generative cell
- (3) Produce nectar
- (4) Guide the entry of pollen tube

119. Non – albuminous seed is produced in :

- (1) Maize
- (2) Castor
- (3) Wheat
- (4) Pea

120. Which of the following shows coiled RNA strand and capsomers ?

- (1) Polio virus
- (2) Tobacco mosaic virus
- (3) Measles virus
- (4) Retrovirus

121. Which one of the following is wrongly matched

- (1) Transcription – Writing information From DNA to t – RNA
- (2) Translation – Using information in m – RNA to make protein
- (3) Repressor protein – Binds to operator to stop enzyme synthesis
- (4) Operon - Structural genes, operator and promoter

122. Transoformation was discovered by :

- (1) Meselson and stahl
- (2) Hershey and chase
- (3) Griffith
- (4) Watson and Crick

123. Fruit colour in squash is an example of :

- (1) Recessive epistasis
- (2) Dominant epistasis
- (3) Complemetary genes
- (4) Inhibitory genes

124. Viruses here :

- (1) DNA enclosed in a protein coat
- (2) Prokaryotic nucleus
- (3) Single chromosome
- (4) Both DNA and RNA

125. The first human hormone produced by recombinant DNA technology is :

- (1) Insulin
- (2) Estrogen
- (3) Thyroxin
- (4) Progesterone

126. An analysis of chromosomal DNA using the southern hybridization technique does not use:

- (1) Electrophoresis
- (2) Blotting
- (3) Autoradiography
- (4) PCR

127. In vitro propagation in plants is characterized by :

- (1) PCR and RAPD
- (2) Northern blotting
- (3) Electrophoresis and HPLC
- (4) Microscopy

128. An alga which can be employed as food for human being is :

- (1) Ulothrix
- (2) Chlorells
- (3) Spirogyra
- (4) Polysiphnia

129. Which vector can clone only small fragment of DNA ?

- (1) Bacterial artificial chromosome
- (2) Yeast artificial chromosome
- (3) Plasmid
- (4) Cosmid

130. An example of ex situ conservation is :

- (1) National park
- (2) Seed Bank
- (3) Wildlife Sanctuary
- (4) Sacred Grove

131. A location with luxuriant growth of lichens on the trees indicates that the

- (1) Trees are very healthy
- (2) Trees are heavily infested
- (3) Location is highly polluted
- (4) Location is not polluted

132. Match the following and select the correct option :

- | | |
|-----------------------|---------------------|
| (a) Earthworm | (i) Pioneer species |
| (b) Succession | (ii) Detritivore |
| (c) Ecosystem service | (iii) Nataliy |
| (d) Population growth | (iv) Pollination |

- | | | | | |
|-----|-------|------|-------|-------|
| | (a) | (b) | (c) | (d) |
| (1) | (i) | (ii) | (iii) | (iv) |
| (2) | (iv) | (i) | (iii) | (ii) |
| (3) | (iii) | (ii) | (iv) | (i) |
| (4) | (ii) | (i) | (iv) | (iii) |

133. A species facing extremely high risk of extinction in the immediate future is called:

- (1) Vulnerable
- (2) Endemic
- (3) Critically Endangered
- (4) Extinct

134. The zone of atmosphere in which the ozone layer is present is called :

- (1) Ionosphere
- (2) Mesosphere
- (3) Stratosphere
- (4) Troposphere

135. The organization which publishes the Red list of species is :

- (1) ICFRE
- (2) IUCN
- (3) UNEP
- (4) WWF

136. Select the Taxon mentioned that represents both marine and fresh water species :

- (1) Echinoderms
- (2) Ctenophora
- (3) Cephalochordata
- (4) Cnidaria

137. Which one of the following living organisms completely lacks of cells wall ?

- (1) Cyanobacteria
- (2) Sea – Fan (Gorgonia)
- (3) Saccharmyces
- (4) Blue – Green algae

138. Planaria posses high capacity of :

- (1) Metamorphosis
- (2) Regeneration
- (3) Alteration of generation
- (4) Bioluminscene

139. A marine cartilaginous fish that can produce electric current is :

- (1) Pristis
- (2) Torpedo
- (3) Trygon
- (4) Scoliodon

140. Choose the correctly matched pair :

- (1) Tendon - Specialized connective tissue
- (2) Adipose tissue – Dense connective tissue
- (3) Areolar tissue – Loose connective tissue
- (4) Cartilage – Loose connective tissue

141. Choose the correctly matched pair :

- (1) Inner lining of salivary ducts – Ciliated epithelium
- (2) Moist surface of buccal cavity - Glandular epithelium
- (3) Tubular parts of nephrons – Cuboidal epithelium
- (4) Inner surface of bronchioles – squamous epithelium

142. In 's' phase of the cell cycle

- (1) Amount of DNA doubles in each cell
- (2) Amount of DNA remains same in each cell.
- (3) Chromosome number is increased
- (4) Amount of DNA is reduced to half in each cell

143. The motile bacteria are able to move by :

- (1) Fimbriae
- (2) Flagella
- (3) Cilia
- (4) Pili

144. Select the option which is not correct with respect to enzyme action :

- (1) Substrate binds with enzyme at its active site
- (2) Addition of lot of succinate does not reverse the inhibition of succinic dehydrogenase by malonate
- (3) A non - competitive inhibitor binds the enzyme at a site distinct from that which binds the substrate
- (4) Malonate is a competitive inhibitor of succinic dehydrogenase

145. Which one of the following is a non - reducing carbohydrate?

- (1) Maltose
- (2) Sucrose
- (3) Lactose
- (4) Ribose 5 - phosphate

146. The enzyme recombinase is required at which stage of meiosis :

- (1) Pachytene
- (2) Zygotene
- (3) Diplotene
- (4) Diakinesis

147. The initial step in the digestion of milk in human is carried out by ?

- (1) Lipase
- (2) Trypsin
- (3) Rennin
- (4) Pepsin

148. Fructose is absorbed into the blood through mucosa cells of intestine by the process called :

- (1) Active transport
- (2) Facilitated transport
- (3) Simple diffusion
- (4) Co-transport mechanism

149. Approximately seventy percent of carbon – dioxide absorbed by the blood will be transported to the lungs :

- (1) As bicarbonate ions
- (2) In the form of dissolved gas molecules
- (3) By binding to R.B.C
- (4) As carbamino – haemoglobin

150. Person with blood group AB is considered as universal recipient because he has :

- (1) Both A and B antigens on RBC but no antibodies in the plasma
- (2) Both A and B antibodies in the plasma
- (3) No antigen on RBC and no antibody in the plasma
- (4) Both A and B antigens in the plasma but no antibodies

151. How do parasympathetic neural signals affect the working of the heart ?

- (1) Reduce both heart rate and cardiac output
- (2) Heart rate is increased without affecting the cardiac output.
- (3) Both heart rate and cardiac output increase
- (4) Heart rate decreases but cardiac output increases.

152. Which of the following causes an increase in sodium reabsorption in the distal convoluted tubule ?

- (1) Increase in aldosterone levels
- (2) Increase in antidiuretic hormone levels
- (3) Decrease in aldosterone levels
- (4) Decrease in antidiuretic hormone levels

153. Select the correct matching of the type of the joint with the example in human skeletal system :

- | Type of joint | Example |
|-------------------------|--|
| (1) Cartilaginous joint | - Between frontal and parietal |
| (2) Pivot joint | - Between third and fourth cervical
Vertebrae |
| (3) Hinge joint | - Between humerus and pectoral girdle |
| (4) Gliding joint | - Between carpals |

154. Stimulation of a muscle fiber by a motor neuron occurs at :

- (1) The neuromuscular junction
- (2) The transverse tubules
- (3) The myofibril
- (4) The sarcoplasmic reticulum

155. Injury localized to the hypothalamus would most likely disrupt :

- (1) Short – term memory
- (2) Co- ordination during locomotion.
- (3) Executive function, such as decision making
- (4) Regulation of body temperature

156. Which one of the following statements is not correct ?

- (1) Retinal is the light absorbing portion of visual photo pigments
- (2) In retina the rods have the photopigment rhodopsin while cones have three different photopigments
- (3) Retinal is a derivative of vitamin C.
- (4) Rhodopsin is the purplish red protein present in rods only.

157. Identify the hormone with its correct matching of source and function :

- (1) Oxytocin – posterior pituitary, growth and maintenance of mammary glands
- (2) Melatonin – pineal gland, regulates the normal rhythm of sleepwake cycle.
- (3) Progesterone – corpus – luteum, stimulation of growth and activities of female secondary sex organs
- (4) Atrial natriuretic factor – ventricular wall increases the blood pressure.

158. Fight – or – flight reactions cause activation of :

- (1) The parathyroid glands, leading to increased metabolic rate.
- (2) The kidney, leading to suppression of reninangiotensin – aldosterone pathway.
- (3) The adrenal medulla, leading to increased secretion of epinephrine and norepinephrine
- (4) The pancreas leading to a reduction in the blood sugar levels

159. The shared terminal duct of the reproductive and urinary system in the human male is :

- (1) Urethra
- (2) Ureter
- (3) Vas deferens
- (4) Vasa efferentia

160. The main function of mammalian corpus luteum is to produce :

- (1) Estrogen only
- (2) Progesterone
- (3) Human chorionic gonadotropin
- (4) Relaxin only

161. Select the correct option describing gonadotropin activity in a normal pregnant female :

- (1) High level of FSH and LH stimulates the thickening of endometrium
- (2) High level of FSH and LH facilitate implanatation of the embryo
- (3) High level of hCG stimulates the synthesis of estrogen and progesterone.
- (4) High level of hCG stimulates the thickening of endometrium.

162. Tubectomy is a method of sterilization in which :

- (1) Small party of fallopian tube is removed or tied up
- (2) Ovaries are removd surgically
- (3) Small party of vas deferens is removed or tied up.
- (4) Uterus is removed surgically

163. Which of the following is a hormone releasing intra Uterine Device (IUD)

- (i) Multiload 375
- (ii) LNG – 20
- (iii) Cervical cap
- (iv) Vault

164. Assisted reproductive technology, IVF involves transfer of :

- (1) Ovum into fallopian tube
- (2) Zygote into the fallopian tube
- (3) Zygote into the uterus
- (4) Embryo with 16 blastomeres into the fallopian tube

165. A man whose father was colour blind marries a woman who had a colour bline mother and normal father. What percentage of male children of this couple will be colour blind ?

- (1) 25%
- (2) 0%
- (3) 50%
- (4) 75%

166. In a population of 1000 individuals 360 belong to genotype AA, 480 to Aa and the remaining 160 to aa. Based on this data, the frequency of allele a in the population is :

- (1) 0.4
- (2) 0.5
- (3) 0.6
- (4) 0.7

167. A human female with Turner's syndrome :

- (1) Has 45 chromosome with XO
- (2) Has one additional X chromosome
- (3) Exhibits male characters
- (4) Is able to produce children with normal husband

168. Select the correct option :

	Direction of RNA Synthesis	Direction of reading of the template DNA strand
(1)	5' - 3'	3' - 5'
(2)	3' - 5'	5' - 3'
(3)	5' - 3'	5' - 3'
(4)	3' - 5'	3' - 5'

169. Commonly used vectors for human genome sequencing are :

- (1) T - DNA
- (2) BAC and YAC
- (3) Expression Vectors
- (4) T/A Cloning Vectors

170. Forelimbs of cat, lizard used in walking forelimbs of whale used in swimming and forelimbs of bats used in flying are an example of :

- (1) Analogous organs
- (2) Adaptive radiation
- (3) Homologous organs
- (4) Convergent evolution

171. Which one of the following are analogous structures ?

- (1) Wings of Bat and wings of Pigeon
- (2) Gills of Prawn and Lungs of Man
- (3) Thorns of Bouganvillea and Tendrills of Cucurbita
- (4) Flippers of Dolphin and Legs of Horse

172. Which is the particular type of drug that is obtained from the plant whose one flowering branch is shown below?



- (1) Hallucinogen
- (2) Depressant
- (3) Stimulant
- (4) Pain – killer

173. At which stage of HIV infection does one usually show symptoms of AIDS ?

- (1) Within 15 days of sexual contact with an infected person
- (2) When the infected retro virus enters host cells
- (3) When HIV damages large number of helper T – Lymphocytes.
- (4) When the viral DNA is produced by reverse transcriptase

174. To obtain virus – free healthy plants from a diseased one by tissue culture technique, which part/parts of the diseased plant will be taken?

- (1) Apical meristem only
- (2) Palisade parenchyma
- (3) Both apical and axillary meristem
- (4) Epidermis only

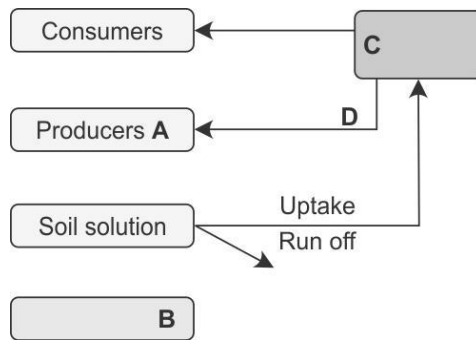
175. What gases are produced in anaerobic sludge digesters ?

- (1) Methane and CO₂ only
- (2) Methane, Hydrogen, sulphide and CO₂
- (3) Methane, Hydrogen sulphide and O₂
- (4) Hydrogen sulphide and CO₂

176. Just as a person moving from Delhi to Shimla to escape the heat for the duration of hot summer, thousands of migratory birds from Siberia and other extremely cold northern regions move to :

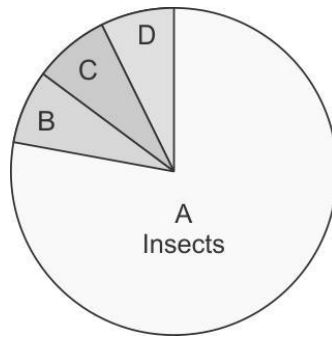
- (1) Western Ghat
- (2) Meghalaya
- (3) Corbett National Park
- (4) Keolado National Park

177. Given below is a simplified model of phosphorus cycling in a terrestrial ecosystem with four blanks (A-D) identify the blanks.



	A	B	C	D
(1)	Rock minerals	Detritus	Litter Fall	Producers
(2)	Litter fall	Producers	Rock Minerals	Detritus
(3)	Detritus	Rock minerals	Producer	Litter fall
(4)	Producers	Litter fall	Rock Minerals	Detritus

178. Given below is the representation of the extent of global diversity of invertebrates. What groups the four portions (A-D) represent respectively?



	A	B	C	D
(1)	Insects	Crustaceans	Other animal groups	Molluscs
(2)	Crustaceans	Insects	Molluscs	Other animal groups
(3)	Molluscs	Other animal groups	Crustaceans	Insects
(4)	Insects	Molluscs	Crustaceanus	Other animal groups

179. A scrubber in the exhaust of a chemical industrial plant removes:

- (1) Gases like sulphur dioxide
- (2) Particulate matter of the size 5 micrometer or above
- (3) Gases like ozone and methane
- (4) Particulate matter of the size 2.5 micrometer or less

180. If 20 J of energy is trapped at producer level, then how much energy will be available to peacock as food in the following chain?

Plant →mice →snake →peacock

- (1) 0.02 J
- (2) 0.002 J
- (3) 0.2 J
- (4) 0.0002 J